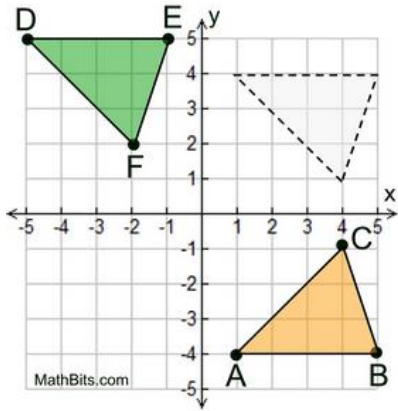


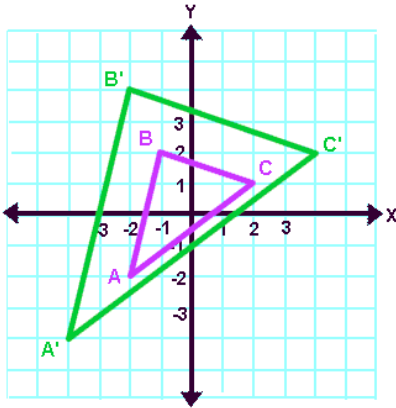
# Remediation-Congruence, Rigid Motion, and Proving Congruence Worksheet

Name \_\_\_\_\_ Block \_\_\_\_\_

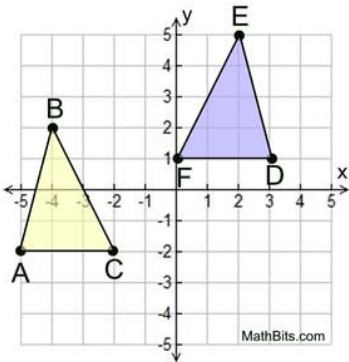
1. Is  $\triangle ABC \cong \triangle DEF$ ? Explain how you know.



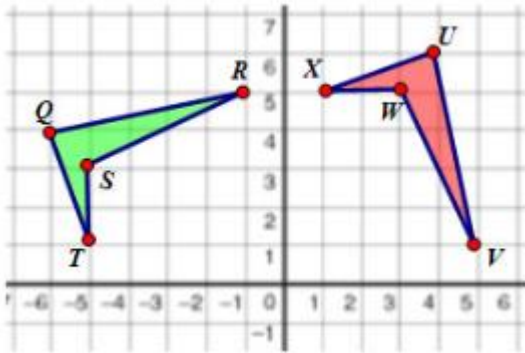
2. Is  $\triangle ABC \cong \triangle A'B'C'$ ? Explain how you know.



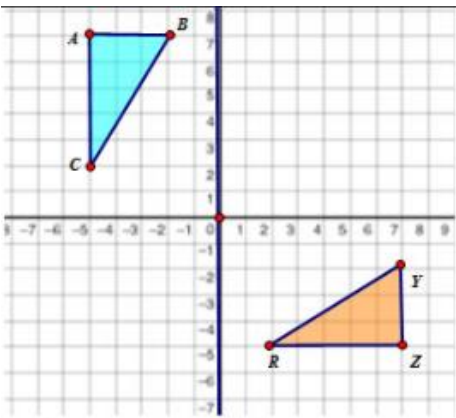
3. Is  $\triangle ABC \cong \triangle DEF$ ? Explain how you know.



4. Is  $QRST \cong UVWX$ ? Explain how you know.



5. Is  $\triangle ABC \cong \triangle ZYR$ ? Explain how you know.



6. Is  $\triangle ABC \cong \triangle KTH$ ? Explain how you know.

