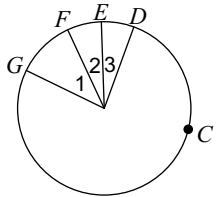


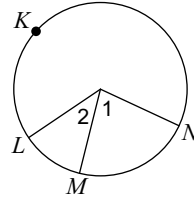
Central Angles and Arc Measures

If an angle is given, name the arc it makes. If an arc is given, name its central angle.

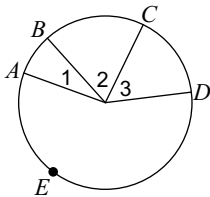
1) \widehat{FE}



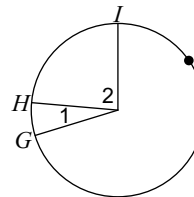
2) \widehat{NLM}



3) $\angle 2$

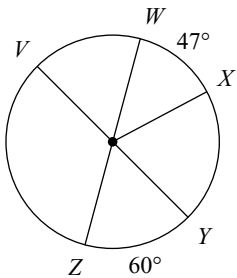


4) Major arc for $\angle 2$

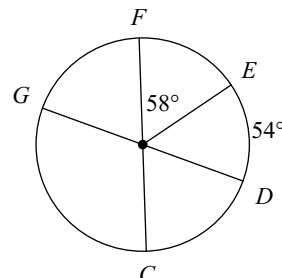


Find the measure of the arc or central angle indicated. Assume that lines which appear to be diameters are actual diameters.

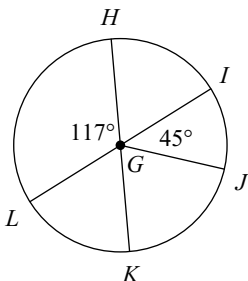
5) $m\widehat{XZ}$



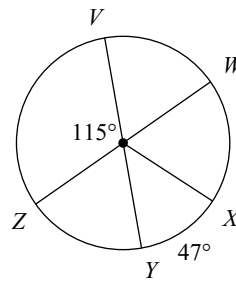
6) $m\widehat{EDG}$



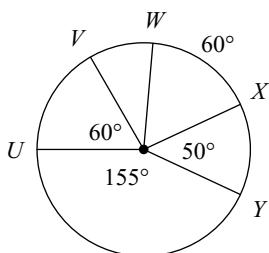
7) $m\angle IGK$



8) $m\widehat{WX}$



9) $m\widehat{YVX}$



10) $m\angle IGK$

