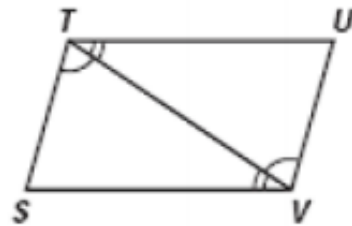
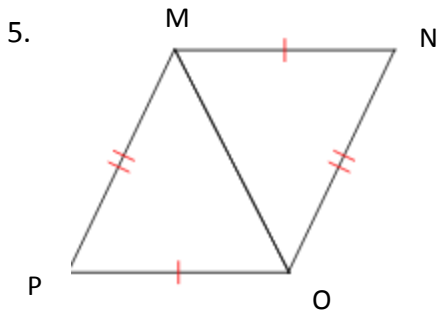
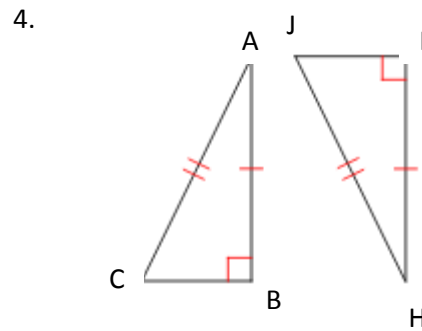
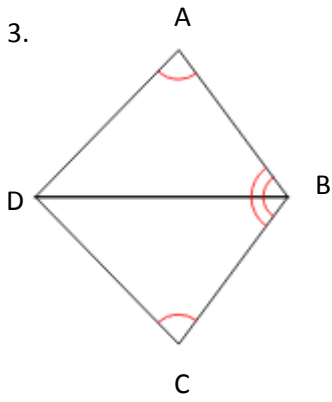
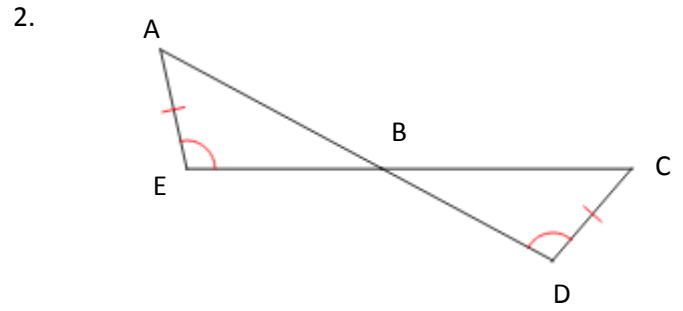
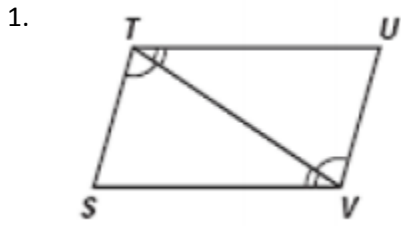


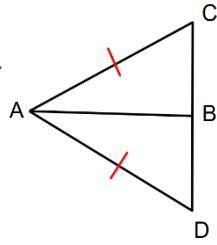
Proving Congruence Worksheet

Prove that the following triangles are congruent.



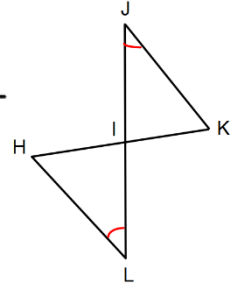
7. Given \overline{AB} bisects \overline{CD} , prove that $\angle C \cong \angle D$

Statement	Reason



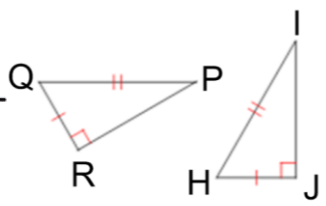
8. Given the following triangle, prove that $\overline{HI} \cong \overline{KI}$

Statement	Reason



9. Given the following triangle, prove that $\angle P \cong \angle I$

Statement	Reason



10. Given the following triangle, prove that $\overline{KJ} \cong \overline{HI}$

Statement	Reason

