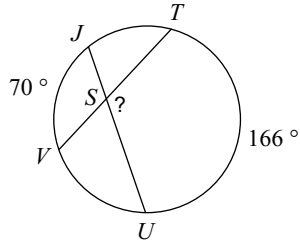


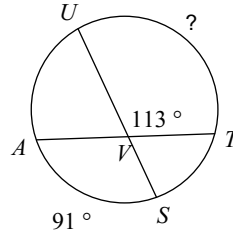
### Chord - Chord Angles

**Find the measure of the arc or angle indicated. Assume that lines which appear tangent are tangent.**

1)

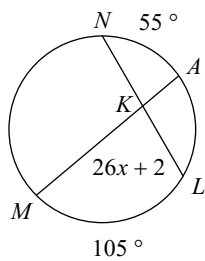


2)

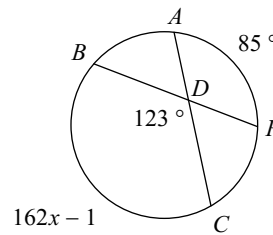


**Solve for x. Assume that lines which appear tangent are tangent.**

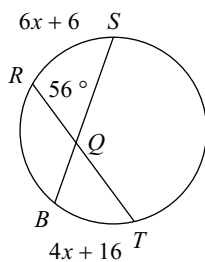
3)



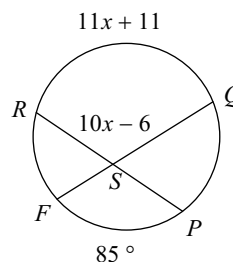
4)



5)

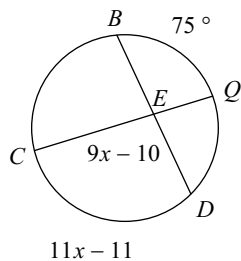


6)



**Find the measure of the arc or angle indicated. Assume that lines which appear tangent are tangent.**

7) Find  $m\angle DEC$



8) Find  $m\widehat{JD}$

