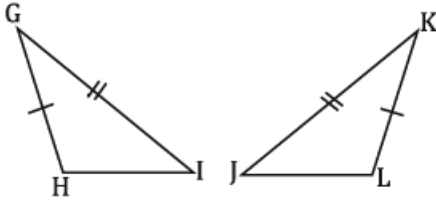


Complete the following proofs.

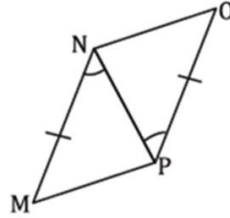
1. Given: $\overline{GH} \cong \overline{KL}$, $\angle G \cong \angle K$, and $\overline{GI} \cong \overline{KJ}$



Prove: $\overline{HI} \cong \overline{LJ}$

Statements	Reasons
1. $\overline{GH} \cong \overline{KL}$	1. Given
2.	2. Given
3. $\overline{GI} \cong \overline{KJ}$	3.
4.	4. SAS
5. $\overline{HI} \cong \overline{LJ}$	5.

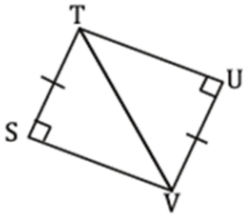
2. Given: $\angle MNP \cong \angle OPN$, and $\overline{MN} \cong \overline{OP}$



Prove: $\overline{MP} \cong \overline{ON}$

Statements	Reasons
1.	1. Given
2. $\overline{MN} \cong \overline{OP}$	2.
3. $\overline{NP} \cong \overline{NP}$	3.
4. $\triangle MNP \cong \triangle OPN$	4.
5.	5. CPCTC

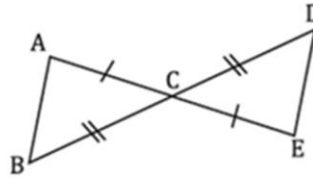
3. Given: $\overline{ST} \cong \overline{UV}$



Prove: $\angle SVT \cong \angle UTV$

Statements	Reasons
1.	1. Given
2.	2. Reflexive Property
3.	3. HL
4. $\angle SVT \cong \angle UTV$	4.

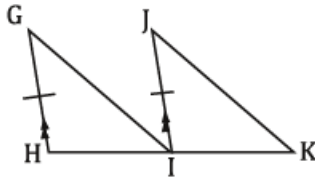
4. Given: $\overline{AC} \cong \overline{EC}$, $\overline{DC} \cong \overline{BC}$



Prove: $\angle B \cong \angle D$

Statements	Reasons
1.	1.
2.	2. Given
3. $\angle ACB \cong \angle DCE$	3.
4. $\triangle ABC \cong \triangle DEC$	4.
5. $\angle B \cong \angle D$	5.

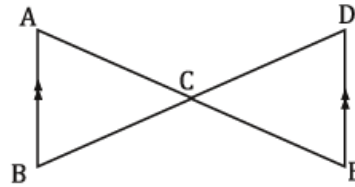
5. Given: $\overline{GH} \parallel \overline{JI}$, I is the midpoint of HK and $\overline{GH} \cong \overline{JI}$



Prove: $\angle G \cong \angle J$

Statements	Reasons
1. $\overline{GH} \parallel \overline{JI}$	1.
2. I is the midpoint of HK	2.
3.	3. Given
4. $\overline{HI} \cong \overline{IK}$	4.
5.	5. Corresponding
6.	6. SAS
7. $\angle G \cong \angle J$	7.

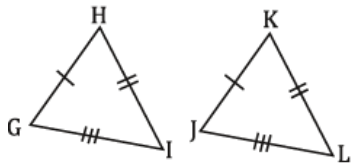
6. Given: $\overline{AB} \parallel \overline{DE}$, \overline{AE} bisects \overline{BD}



Prove: $\overline{AC} \cong \overline{EC}$

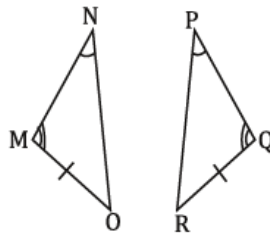
Statements	Reasons
1.	1.
2.	2. Given
3. $\angle ABC \cong \angle EDC$	3.
4. $\angle ACB \cong \angle DCE$	4.
5.	5. Def of Bisect
6. $\triangle ABC \cong \triangle EDC$	6.
7.	7.

7. Given: $\overline{GH} \cong \overline{JK}$, $\overline{HI} \cong \overline{KL}$, and $\overline{IG} \cong \overline{LJ}$



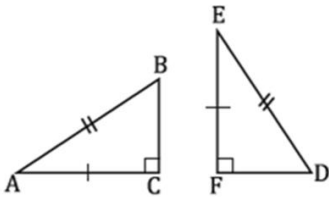
Prove: $\angle I \cong \angle L$

8. Given: $\angle N \cong \angle P$, $\angle M \cong \angle Q$, and $\overline{MO} \cong \overline{QR}$



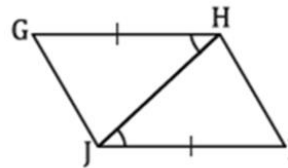
Prove: $\angle O \cong \angle R$

9. Given: $\overline{AC} \cong \overline{EF}$, and $\overline{AB} \cong \overline{ED}$



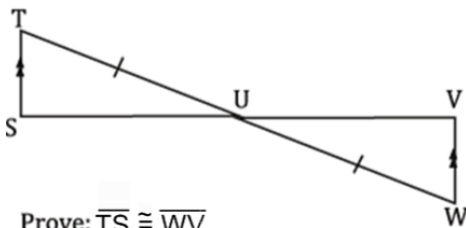
Prove: $\overline{BC} \cong \overline{DF}$

10. Given: $\overline{GH} \cong \overline{JI}$, $\angle GHJ \cong \angle IJH$



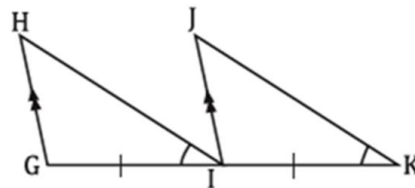
Prove: $\overline{GJ} \cong \overline{IH}$

11. Given: $\overline{TS} \parallel \overline{VW}$, $\overline{TU} \cong \overline{WU}$



Prove: $\overline{TS} \cong \overline{VW}$

12. Given: $\overline{HG} \parallel \overline{JI}$, $\overline{GI} \cong \overline{IK}$, and $\angle HIG \cong \angle JKI$



Prove: $\angle H \cong \angle J$