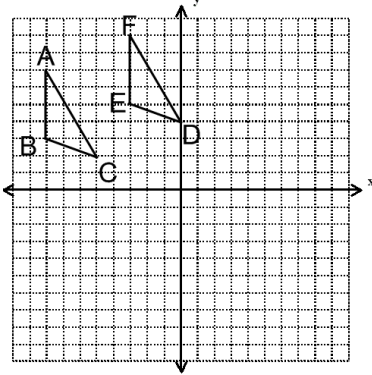
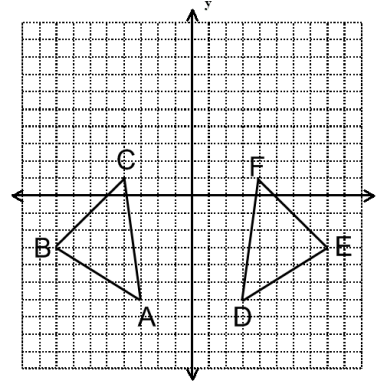


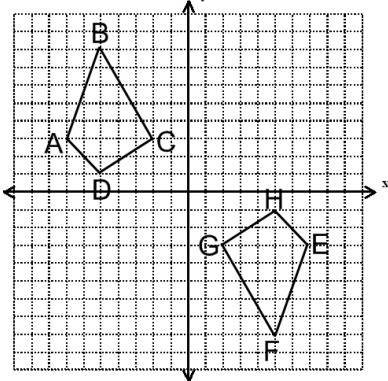
1. Determine if $\triangle ABC \cong \triangle FED$. Explain how you know.



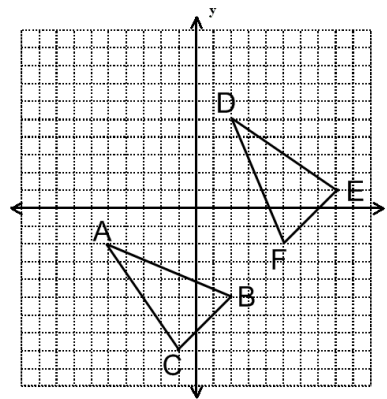
2. Determine if $\triangle ABC \cong \triangle DEF$. Explain how you know.



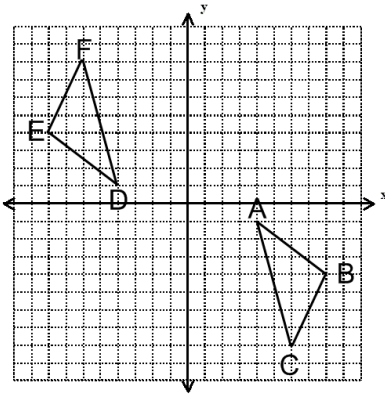
3. Determine if $ABCD \cong EFGH$. Explain how you know.



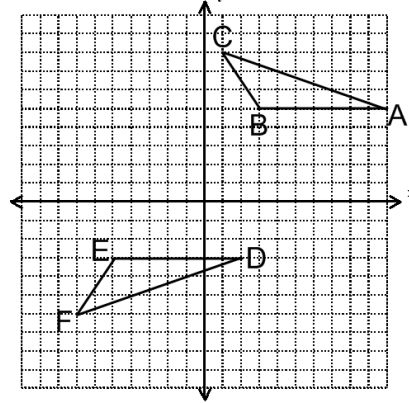
4. Determine if $\triangle ABC \cong \triangle DFE$. Explain how you know.



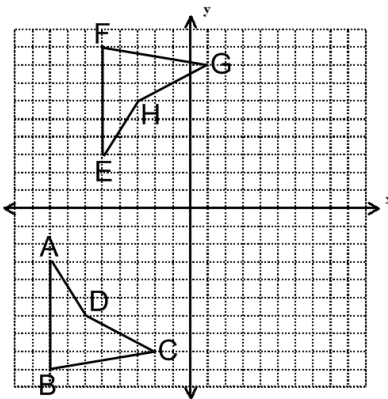
5. Determine if $\triangle ABC \cong \triangle DEF$. Explain how you know.



6. Determine if $\triangle ABC \cong \triangle DEF$. Explain how you know.



7. Determine if $\triangle ABC \cong \triangle FED$. Explain how you know.



8. Determine if $\triangle ABC \cong \triangle DEF$. Explain how you know.

